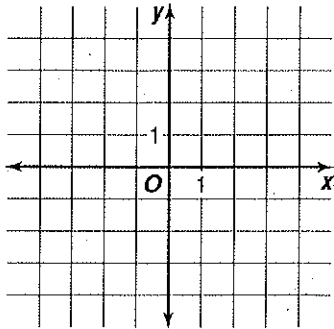


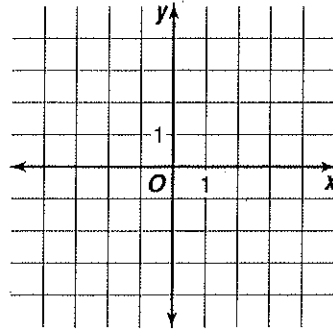
Linear Inequalities

Graph each inequality.

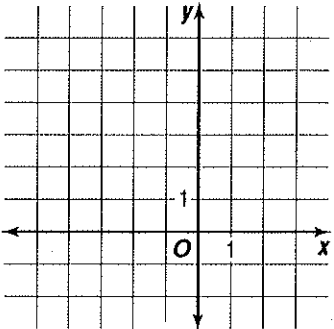
1. $3 - x > 0$



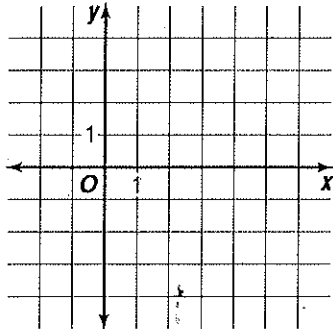
2. $y < -4x - 2$



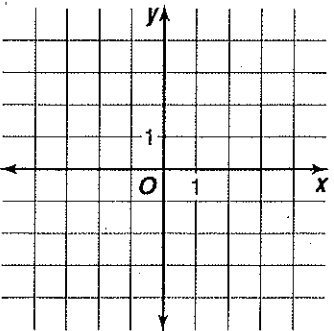
3. $y \geq 2x + 5$



4. $x - 3y \leq 6$



5. $y > |x| - 1$



6. $y > -3|x + 1| - 2$

